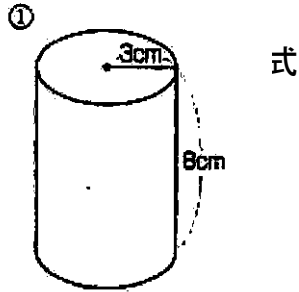
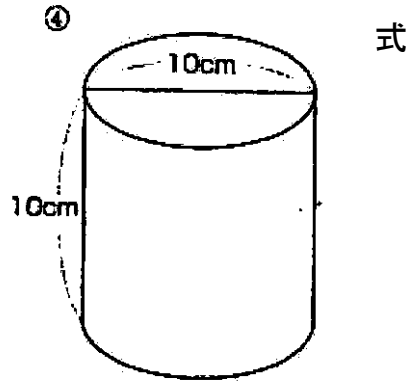


立体の体積

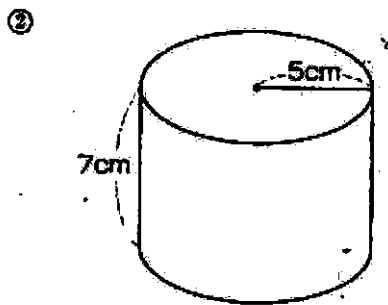
つぎの円柱の体積を求めましょう。(円周率は3で計算します)



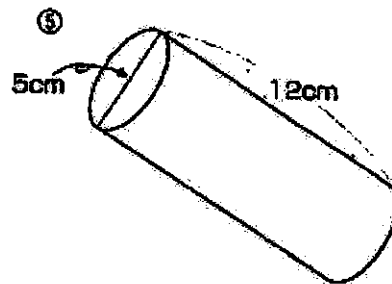
答え 約 _____



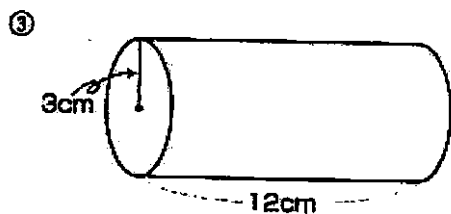
答え 約 _____



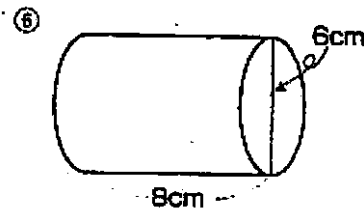
答え 約 _____



答え 約 _____



答え 約 _____



答え 約 _____

- ① $3 \times 3 \times 3 \times 8 = 216$ 216 cm^3 ② $5 \times 5 \times 3 \times 7 = 525$ 525 cm^3 ③ $3 \times 3 \times 3 \times 12 = 324$ 324 cm^3
 ④ $5 \times 5 \times 3 \times 10 = 750$ 750 cm^3 ⑤ $2.5 \times 2.5 \times 3 \times 12 = 225$ 225 cm^3 ⑥ $3 \times 3 \times 3 \times 8 = 216$ 216 cm^3