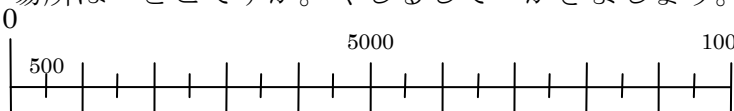
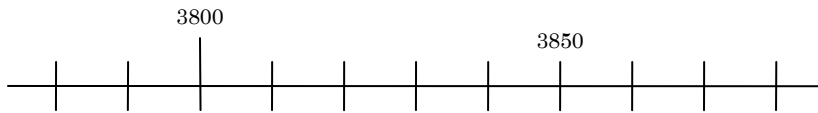
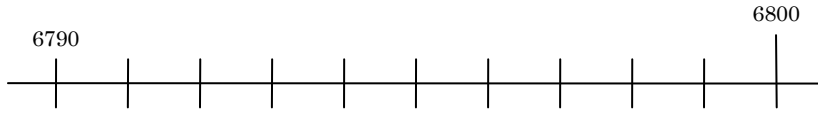



1000 より大きい数

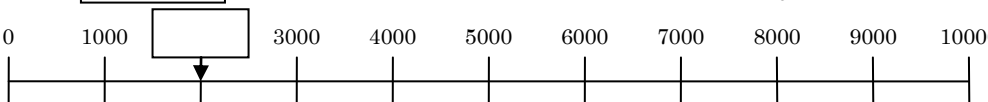
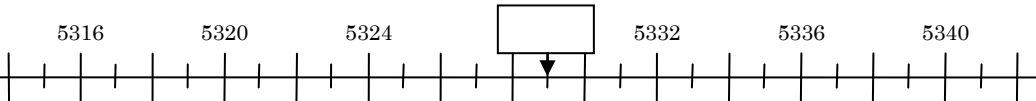
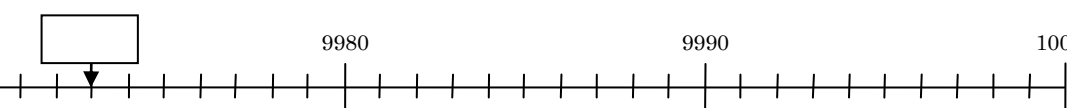
1 つぎの に あてはまる 数を かきましょう。

- (1) 1007 1009 1011 1012
- (2) 2320 2330 2350 2370
- (3) 6600 6800 6900 7100
- (4) 5000 6000 7000 8000
- (5) 7983 7993 8013 8033

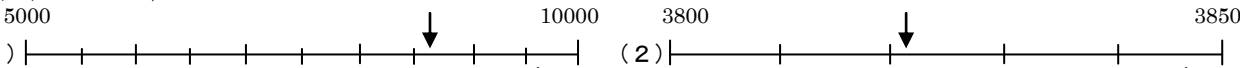


2 つぎの 数の 場所は どこですか。やじるしで かきましょう。

- (1) 8500 
- (2) 3820 
- (3) 6799 
- (4) 9999 

3 つぎの に あてはまる 数を かきましょう。

- (1) 
- (2) 
- (3) 

1. (1) 1009, 1011 (2) 2340, 2360 (3) 6700, 7000 (4) 9000, 10000
 (5) 8003, 8023

2. 
 (1) 
 (3) 

3. (1) 2000 (2) 5329 (3) 9973